

VIDYA BHAWAN BALIKA VIDYA PITH

CLASS- 4

DATE – 18 . 0 2 .21



SUB – MATHS





S. T - PRAGYA







BASED ON N C R T PATTERN:-







CH- GEOMETRY











1.Solve it .








1. If  represents 7 mangoes and  represents 4 apples, what do the following represent ?













a    



b      

















c      

d          

e       

f            

g  

h                

2. Ramesh collected the following information about the number of books in different subjects in his school library .

c How many students are interested in hockey ?

d Which is the next most popular game among the students after cricket ?

Ramesh collected the following information about the number of books in different subjects in his school library.

Subjects	English	Hindi	Science	Maths	Computer	Gneral
No. of books	550	425	325	350	450	525

Answer the following questions.

A. In which subject has the maximum number of books ?

B. In which subject has the minimum number of books ?

C. How many computer books are there in the Library ?

D. What is the total number of books in the library ?
